



NAME _____ DATE _____

ADDITION/SUBTRACTION

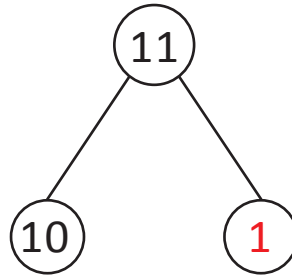
Make number bonds through 10 with a subtraction focus and apply to one step word problems.

Example:

Find the missing numbers.

11 is 10 and 1.

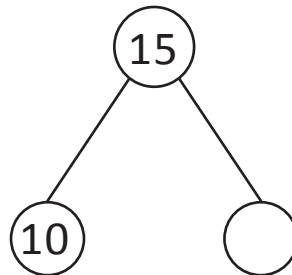
$$11 - \underline{10} = 1$$



Do the following as given in the example.

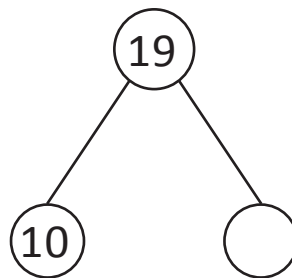
1) 15 is 10 and ___.

$$15 - 10 = \underline{\quad}$$



2) 10 and ___ is 19.

$$19 - 10 = \underline{\quad}$$



3) 10 and 8 is ___.

$$18 - \underline{\quad} = 8$$

