



NAME _____ DATE _____

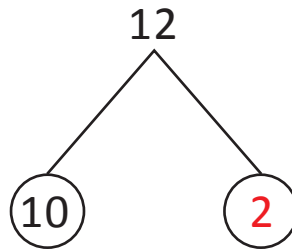
ADDITION/SUBTRACTION

Find the missing numbers same as above.

Example:

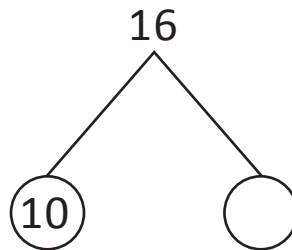
12 is 10 and 2.

$$12 - \underline{10} = 2$$



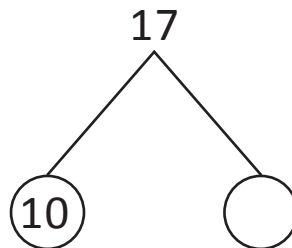
1) 16 is ___ and 6.

$$16 - \underline{\quad} = 6$$



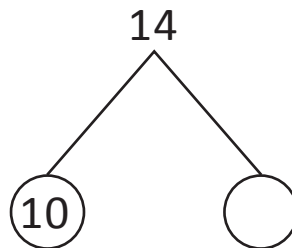
2) 17 is 10 and ___.

$$17 - 10 = \underline{\quad}$$



3) 14 is 10 and ___.

$$14 - 10 = \underline{\quad}$$



4) 10 is ___ and 17.

$$17 - 10 = \underline{\quad}$$

