



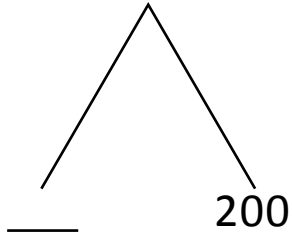
NAME _____

DATE _____

ADDITION OR SUBTRACTION

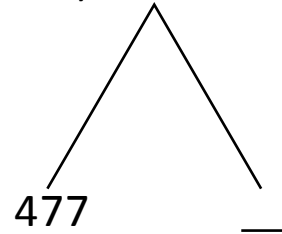
Add by drawing a number bond to make a hundred write the simplified number sentence and solve.

1) $390 + 210$



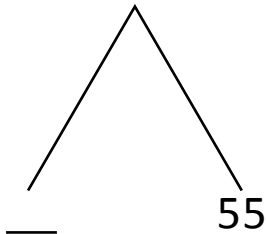
$400 + \underline{\quad} = \underline{\quad}.$

5) $478 + 99$



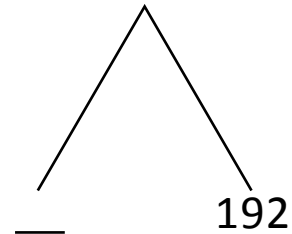
$477 + \underline{\quad} = \underline{\quad}.$

2) $798 + 57$



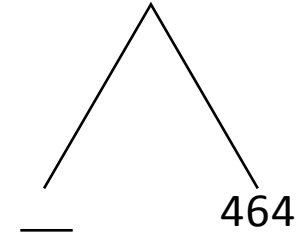
$800 + \underline{\quad} = \underline{\quad}.$

6) $397 + 195$



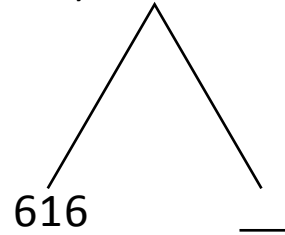
$400 + \underline{\quad} = 592.$

3) $197 + 467$



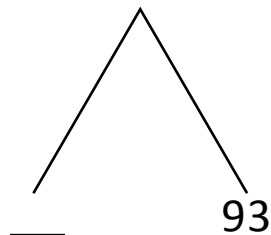
$\underline{\quad} + 464 = \underline{\quad}.$

7) $617 + 299$



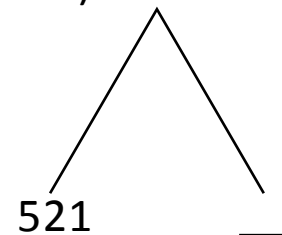
$616 + \underline{\quad} = \underline{\quad}.$

4) $496 + 97$



$\underline{\quad} + 93 = \underline{\quad}.$

8) $529 + 192$



$521 + \underline{\quad} = \underline{\quad}.$