



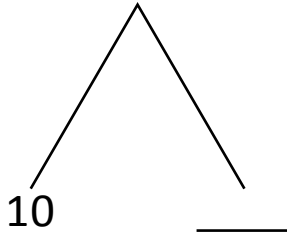
NAME _____

DATE _____

ADDITION OR SUBTRACTION

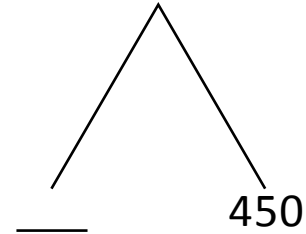
Add by drawing a number bond to make a hundred write the simplified number sentence and solve.

1) $90 + 180$



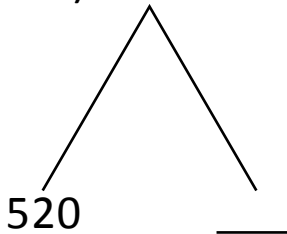
$$\underline{\quad} + 170 = \underline{\quad}.$$

5) $190 + 460$



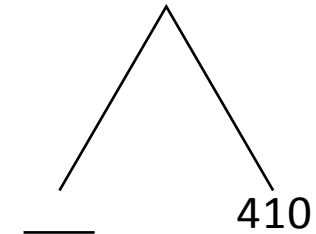
$$\underline{\quad} + 450 = \underline{\quad}.$$

2) $540 + 280$



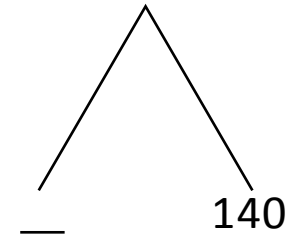
$$520 + \underline{\quad} = \underline{\quad}.$$

6) $380 + 430$



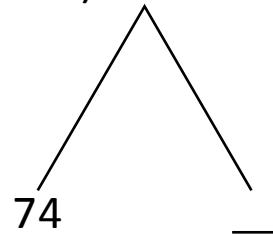
$$\underline{\quad} + 410 = \underline{\quad}.$$

3) $99 + 141$



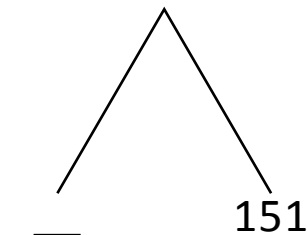
$$\underline{\quad} + 140 = \underline{\quad}.$$

7) $75 + 299$



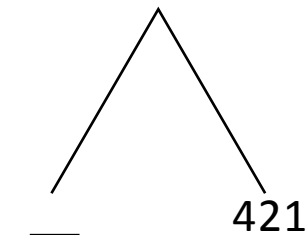
$$74 + \underline{\quad} = \underline{\quad}.$$

4) $795 + 156$



$$\underline{\quad} + 151 = \underline{\quad}.$$

8) $498 + 423$



$$\underline{\quad} + 421 = \underline{\quad}.$$