









NAME _____

DATE _____

ADDITION OR SUBTRACTION

Solve each problem with a written strategy such as a tape diagram, a number bond, the arrow way, the vertical method or chips on place value chart.

The vertical method: (Using disks on the place value chart)

Numbers	Hundreds	Tens	Ones
299			
436			
299 + 436			

$$299 + 436 = \underline{\quad}$$

Using chips on the place value chart:

Numbers	H	T	O
299	• •	••••••••••	••••••••••
436	• • • •	• • •	• • • • • •
299 + 436			

$$299 + 436 = \underline{\quad}$$