



NAME _____

DATE _____

ADDITION OR SUBTRACTION

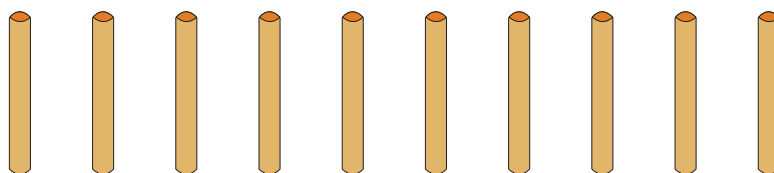
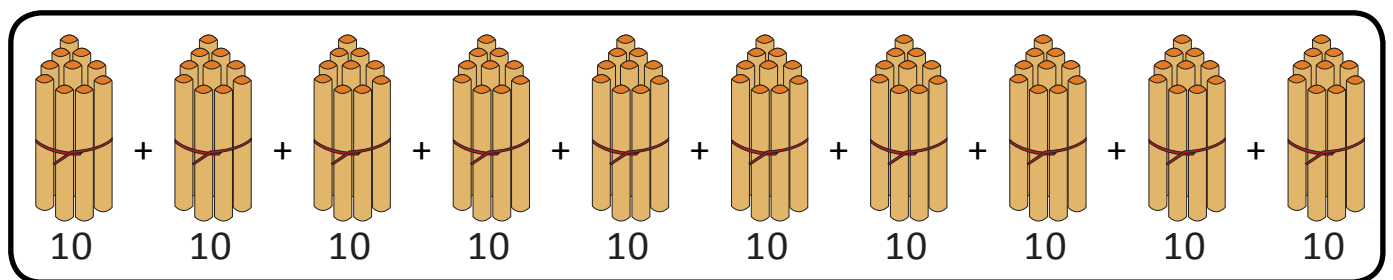
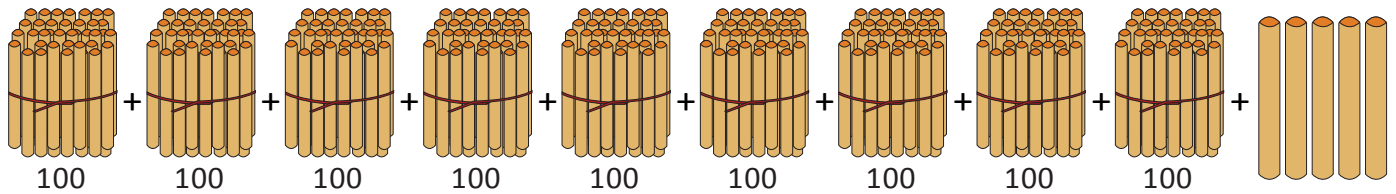
Solve vertically or using mental math. Draw chips on place values chart and unbundle if needed.

1) $905 - 606 = \underline{\quad}$

Hundreds	Tens	Ones

(OR)

$905 - 606 = \underline{\quad}$



$= \underline{\quad} + \underline{\quad} + \underline{\quad} = \underline{\quad}$