

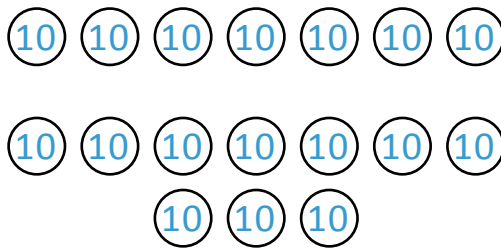


NAME _____ DATE _____

ADDITION OR SUBTRACTION

Solve by drawing chips on the place value chart then use addition to check your work.

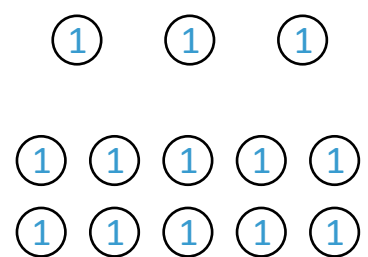
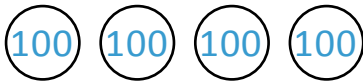
1) $373 - 180 =$ _____



Using addition to check the work.

Numbers	H	T	O
193			
180			
$193 + 180$			

2) $463 - 357 =$ _____



Using addition to check the work.

Numbers	H	T	O
106			
357			
$106 + 357$			