



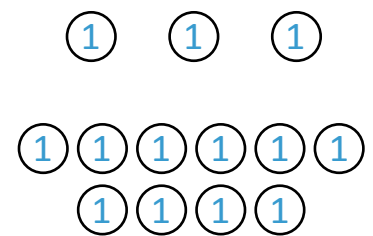
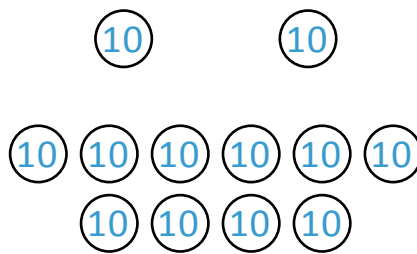
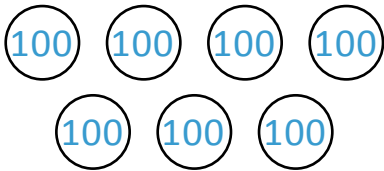
NAME \_\_\_\_\_

DATE \_\_\_\_\_

## ADDITION OR SUBTRACTION

Solve by drawing chips on the place value chart then use addition to check your work.

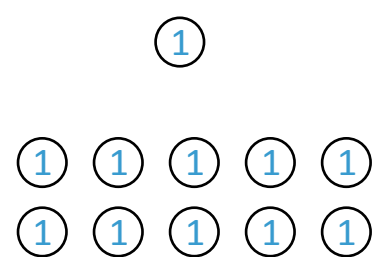


1)  $723 - 584 = \underline{\quad}$



Using addition to check the work.

Numbers	H	T	O
139			
584			
$139 + 584$			

2)  $861 - 673 = \underline{\quad}$



Using addition to check the work.

Numbers	H	T	O
188			
673			
$188 + 673$			