



NAME \_\_\_\_\_

DATE \_\_\_\_\_

## MAKE A TEN TO ADD WITH IN 20

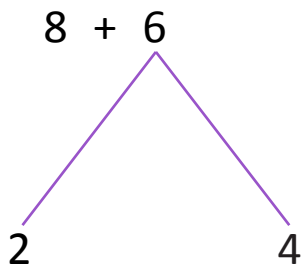
Draw to explain.

Example:

a)  $8 + (2 + 4)$

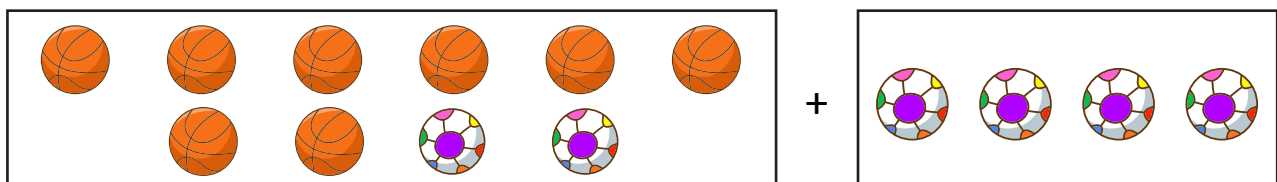
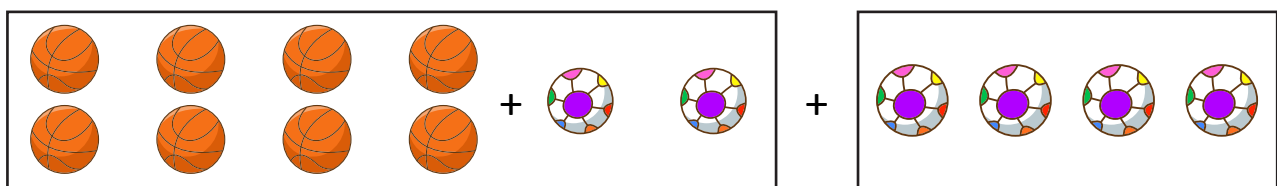
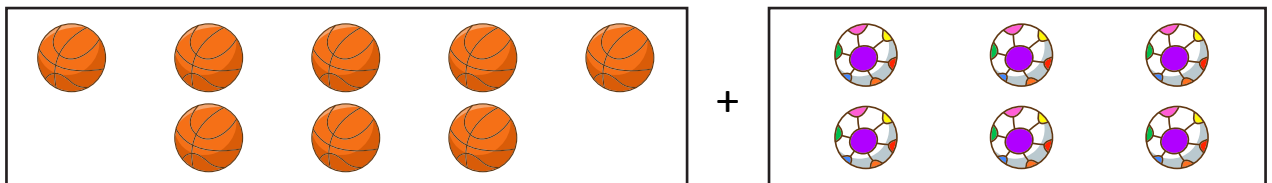
By Using number bond:

$8 + (2 + 4)$



$10 + 4 = \underline{14}$

b) Draw to explain how to add 8 and 6 by making 14.



Total balls =  $8 + 6 = \underline{10} + \underline{4}$