

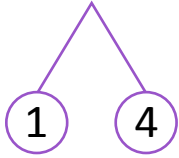


NAME _____ DATE _____

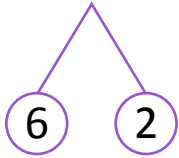
MAKE A TEN TO ADD WITH IN 20

Fill in the blank to make the sentence true.

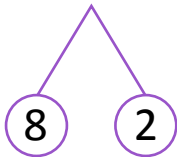
a) $9 + 5 = \underline{\quad} + 4$



b) $4 + 8 = 10 + \underline{\quad}$



c) $8 + \underline{\quad} = 10 + 5$



d) $\underline{\quad} + 5 = 10 + 2$

