



NAME \_\_\_\_\_

DATE \_\_\_\_\_

## APPLICATION OF FRACTIONS TO TELL TIME

Tell time to the nearest five minutes. Relate a.m. and p.m. to time of day.


Draw the hands on the analogue clock to match the time on the digital clock. Then circle a.m. or p.m. based on the description given.

**Example:**

Brushing your teeth after you wake up.




a.m. or p.m.



a) Finishing home work.




a.m. or p.m.



b) The sun is rising.



a.m. or p.m.



c) Morning walk.



a.m. or p.m.

