



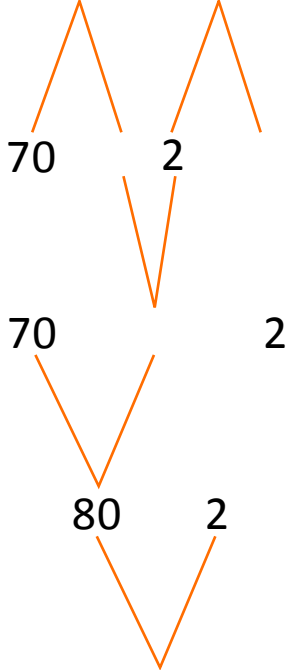
NAME _____

DATE _____

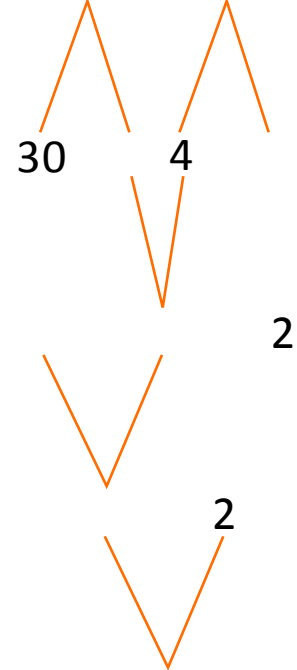
ADDITIONS MADE EASY

Solve the addition problems. Draw your bonds.


1) $78 + 4 = \underline{\quad}$



3) $36 + 6 = \underline{\quad}$



2) $58 + 5 = \underline{\quad}$



4) $26 + 7 = \underline{\quad}$

