



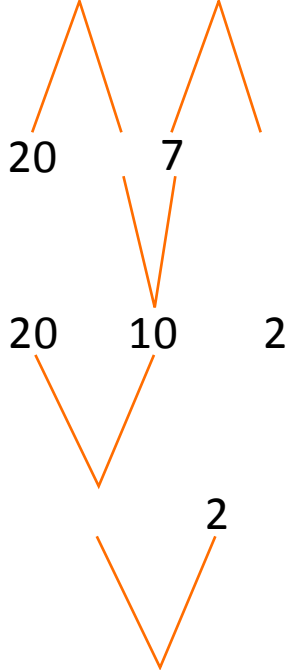
NAME _____

DATE _____

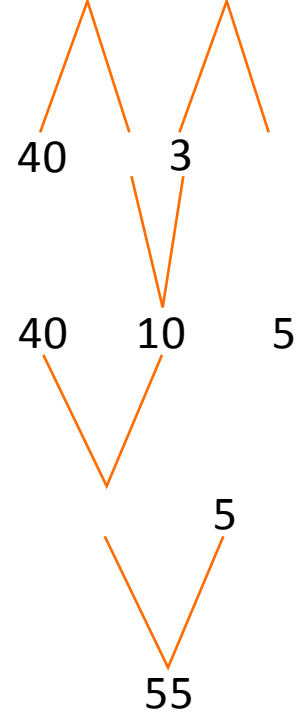
ADDITIONS MADE EASY

Solve the addition problems. Draw your bonds.

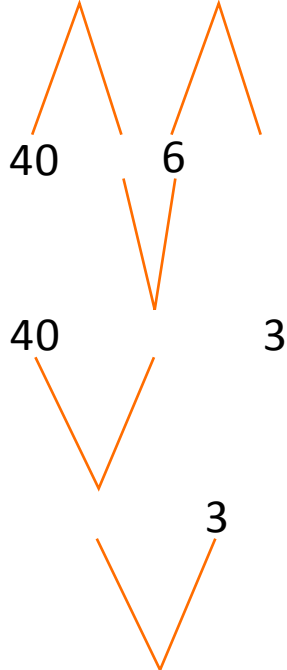
1) $23 + 9 = \underline{\quad}$



3) $47 + 8 = \underline{\quad}$



2) $44 + 9 = \underline{\quad}$



4) $68 + 8 = \underline{\quad}$

