



NAME _____

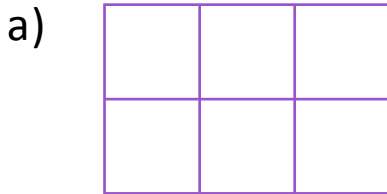
DATE _____

ARRANGEMENT OF ROWS AND COLUMNS

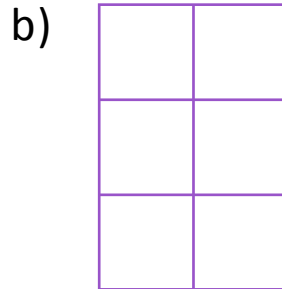
Use your square tiles to construct the following arrays with no gaps or overlaps on this sheet. Write a repeated addition sentence to match your construction.

1) Construct 2 arrays with 6 squares in different shape.

Solution:



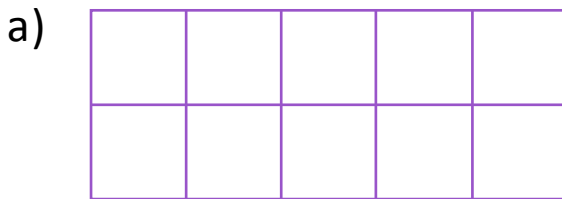
2 rows of 3 = 6.



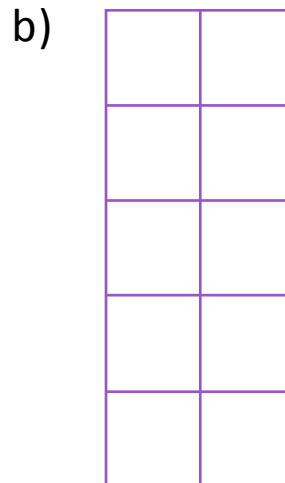
3 rows of 2 = 6.

2) Construct 2 arrays with 10 squares in different shape.

Solution:




2 rows of = .



5 rows of = .

3. a) Construct an array with 9 squares tiles.

Solution:



b) Write the repeated addition sentence to match the new array.

Solution:

3 rows of 3.

 + + = .