



NAME _____

DATE _____

BUNDLE AND COUNT

Count up and down between 90 and 1000 using ones, tens and hundreds.

1. Draw, label, and box 200. Draw pictures of the units you use to count from 200 to 1000.

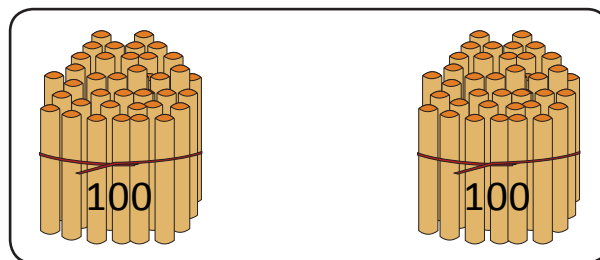
Count from 200 to 1000 than we have.

200, 300, 400, 500, 600, 700, 800, 900, 1000.

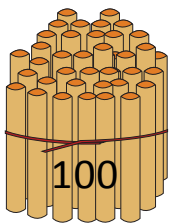
Number of ones = ____

Number of tens = ____

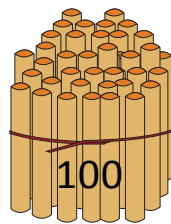
Number of hundreds = ____



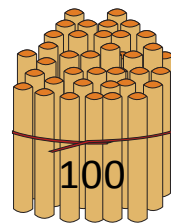
200 box



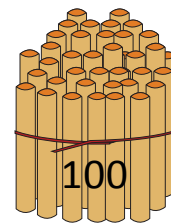
100 bundle



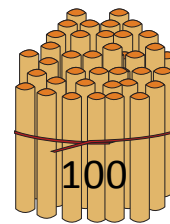
100 bundle



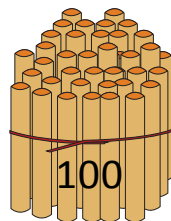
100 bundle



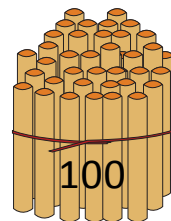
100 bundle



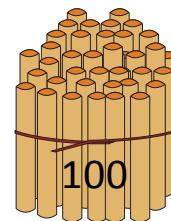
100 bundle



100 bundle



100 bundle



100 bundle

$$200 + \underline{\quad} + 100 + \underline{\quad} + 100 + \underline{\quad} + 100 + 100 + \underline{\quad} = \underline{\quad}$$